




St. Andrews Scots Sr. Sec School

9th Avenue, I.P Extension, Patparganj, Delhi-110092

Session – 2024- 2025

Winter Holiday Homework

Class 2



*Enjoy yourself to the
fullest during this
winter break and have
lots of fun*

Winter Holiday homework



- 1. Do reading and writing regularly**
- 2. Take the print out of all the worksheets and do the work in worksheets .**
- 3. Compile the worksheets in one folder .
Mention your name , class and section on it.**
- 4. Learn tables 6 to 13**



Prepositions

Fill in the blanks with the prepositions given in the box :

in, on, under, over, behind,
beside, between, in front of

1. The cat is _____ the bench.



2. The ball is _____ the bat.



3. The boy is _____ the car.



4. The books are _____ the box.



5. The shoes are _____ the table.



6. The girl is _____ the book.



7. My dog jumped _____ the box.



8. The ball is _____ the boxes.



Prepositions

Choose the correct preposition:

1. The fruits are (**in** / **on**) the basket.
2. The cat is hiding (**under** / **to**) my bed.
3. Some birds are flying (**over** / **for**) the house.
4. The tree is (**behind** / **in**) the house.
5. The dog is standing (**in** / **between**) the two chairs.
6. My sister lives (**in** / **on**) Korea.
7. My classroom is (**on** / **at**) the ground floor.
8. Please don't walk (**in front of** / **to**) me.
9. The bear is (**beside** / **in**) the sofa.
10. The cat was sleeping (**in** / **under**) the table.

विषय - हिंदी

अनेक शब्दों के लिए एक शब्द

1. गाना गाने वाला -
2. आभूषण बनाने वाला -
3. कपड़े धोने वाला -
4. रोगी का इलाज करने वाला -
5. मिट्टी के बर्तन बनाने वाला -
6. मांस खाने वाला -
7. जूते बनाने वाला -
8. चित्र बनाने वाला -
9. जिसमें दया ना हो -
10. सप्ताह में एक बार होने वाला -

चित्र में रंग भरो और पाँच पंक्तियाँ लिखें

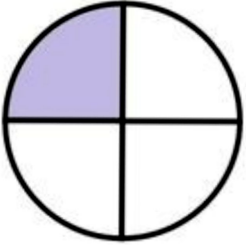


SUBJECT- MATHS

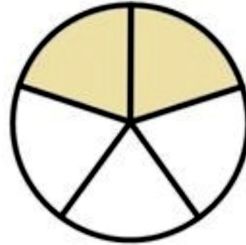
Q. Fill in the blanks

1. _____ is the official currency of Japan.
2. A leap year has _____ days.
3. Opposite sides of the rectangle are _____.
4. There are two types of clock namely, _____ and _____.
5. Christmas comes in the month of _____.
6. The symbol for rupee is _____ and paise is _____.
7. A triangle has _____ sides and _____ vertices.
8. Pound is the currency of _____.
9. _____ comes before Wednesday.
10. Half past 5 is equal to _____.

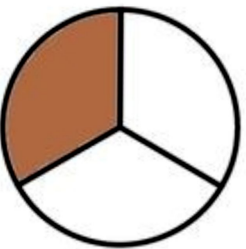
Write fraction of the shaded part.



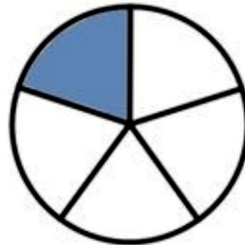
$$\frac{1}{4}$$



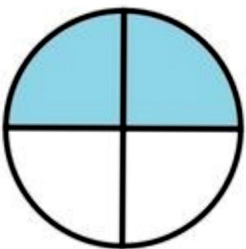
—




—



—



—



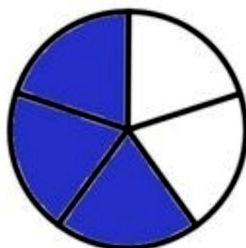
—



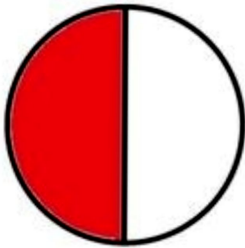
—



—



—



—

Subject :EVS

Give two examples of each

1. Water transport

_____ , _____

2. Land transport

_____ , _____

3. Air transport

_____ , _____

4. Slow moving vehicles

_____ , _____

5. Fastest means of transport

_____ , _____

6. Animals used in hilly areas

_____ , _____

Subject - Computer

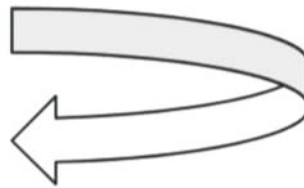
Q1 Give one word answer.

a) It is a shape with three sides. _____

b) To save a document. _____

Q2 Match the following.

a) Text tool



b) Line tool.

A

c) Curve



Q3 Rearrange the letters to get the correct words.

a) ORWD. _____

b) BALNK ODUCEMENT _____

ART

Complete all the pages of Fusion and Fission Art and Craft book

Happy
New Year